

Counting Money: Pence

1 Count the money and write the amount shown.

a  = p

b  = p

c  = p

d  = p

e  = p

f p = 



g p = 

h p = 


i p = 

j p = 

1 Use $<$, $>$ or $=$ to compare the amounts.

a  

b  

c  

e  

f  

2 Jack selects 3 of the coins below. He uses each coin **only once**.



a What is the lowest total he can make?

	p
--	---

What 3 coins did he use?

p	p	p

b What is the highest total he can make?

	p
--	---

What 3 coins did he use?

p	p	p

Answers

1 Count the money and write the amount shown.

a  = p

b  = p

c  = p

d  = p

e  = p

f p = 


g p = 

h p = 

i p = 



j p = 

1 Use $<$, $>$ or $=$ to compare the amounts.

a  

b  

c  

e  

f  

2 Jack selects 3 of the coins below. He uses each coin **only once**.



a What is the lowest total he can make?

p

What 3 coins did he use?

p p p

b What is the highest total he can make?

p

What 3 coins did he use?

p p p