










Select money to make an amount

1 Circle the coins that would make the amount shown.

<p>a 15p</p> 	<p>b 20p</p> 	<p>c 23p</p> 
<p>d 28p</p> 	<p>e 30p</p> 	<p>f 32p</p> 
<p>g 37p</p> 	<p>h 46p</p> 	<p>i 54p</p> 

2 Shade the box that **does not** show 26p.

Shade the box that **does not** show 35p.

Extension:

The piggy bank shows £5 and 26p.

True or false? Explain how you know.



.....

.....

.....

.....

.....

Answers

1 Circle the coins that would make the amount shown. Any correct combination.

<p>a 15p</p>	<p>b 20p</p>	<p>c 23p</p>
<p>d 28p</p>	<p>e 30p</p>	<p>f 32p</p>
<p>g 37p</p>	<p>h 46p</p>	<p>i 54p</p>

2 Shade the box that **does not** show 26p. Shade the box that **does not** show 35p.

Extension:

False. The piggy bank shows £4 and 26p.