

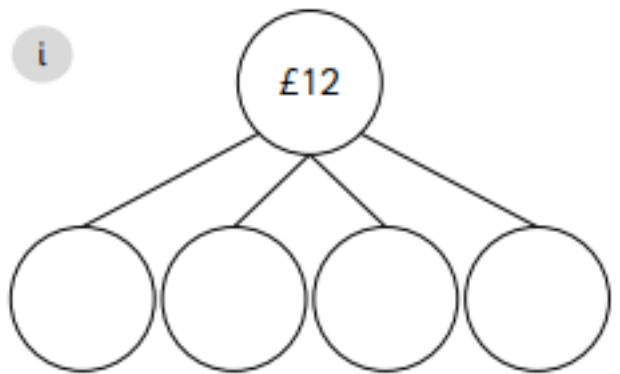
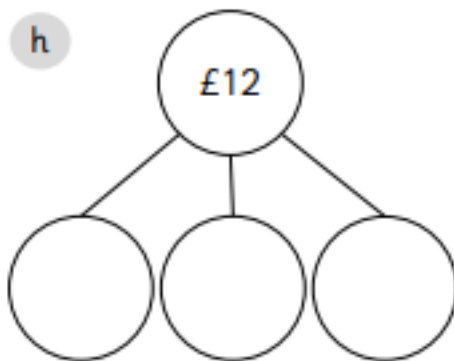
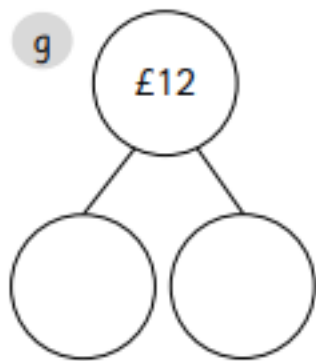
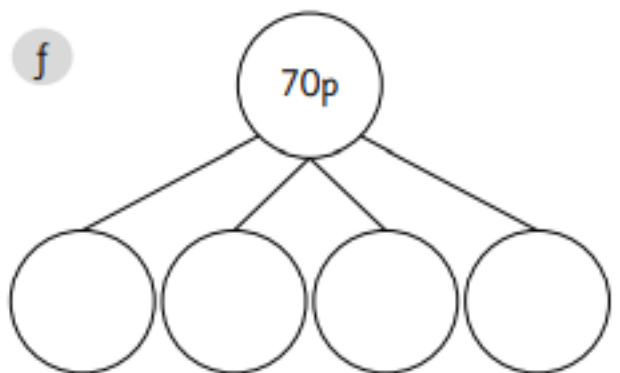
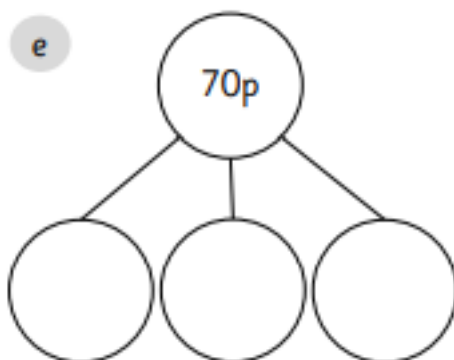
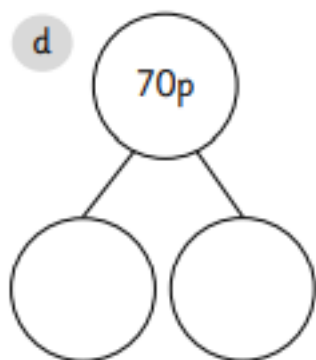
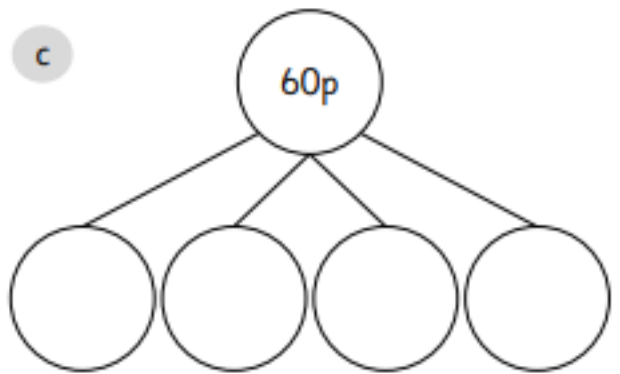
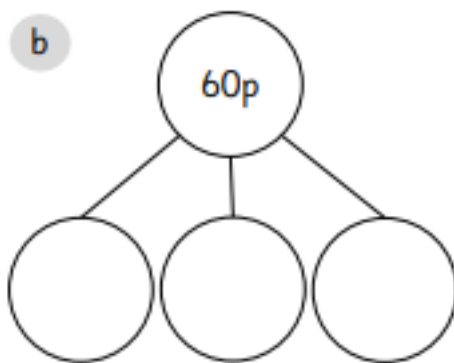
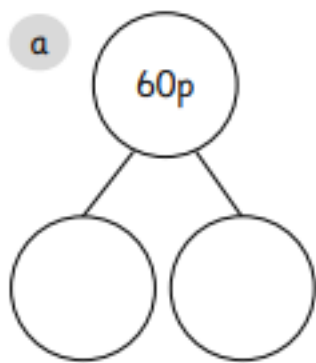
WALT: make the same amount

1 Draw lines between the two matching amounts.



Extension:

1 Complete the part-whole models using note and coin values.



Answers

1 Draw lines between the two matching amounts.

The image shows a matching exercise with 14 boxes of British currency on the left and 14 boxes on the right, connected by red lines. The boxes contain various combinations of banknotes and coins. The connections are as follows:

- Box 1 (left) connects to Box 10 (right).
- Box 2 (left) connects to Box 11 (right).
- Box 3 (left) connects to Box 12 (right).
- Box 4 (left) connects to Box 13 (right).
- Box 5 (left) connects to Box 14 (right).
- Box 6 (left) connects to Box 1 (right).
- Box 7 (left) connects to Box 2 (right).
- Box 8 (left) connects to Box 3 (right).
- Box 9 (left) connects to Box 4 (right).
- Box 10 (left) connects to Box 5 (right).
- Box 11 (left) connects to Box 6 (right).
- Box 12 (left) connects to Box 7 (right).
- Box 13 (left) connects to Box 8 (right).
- Box 14 (left) connects to Box 9 (right).

1 Complete the part-whole models using note and coin values.

