

Order numbers



Complete the sentences.


1.



The greatest number is _____.

The smallest number is _____.

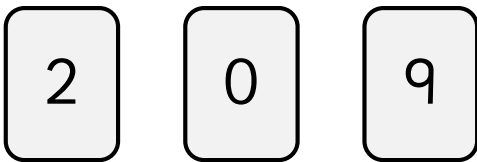
2.



The greatest number is _____.

The smallest number is _____.


3.



The greatest number is _____.

The smallest number is _____.


4.



The greatest number is _____.

The smallest number is _____.


5.



The greatest number is _____.

The smallest number is _____.

6.



The greatest number is _____.

The smallest number is _____.

Order numbers



Complete the sentences.

1.




The greatest number is _____.

The smallest number is _____.

_____ is greater than _____.

_____ is smaller than _____.

2.



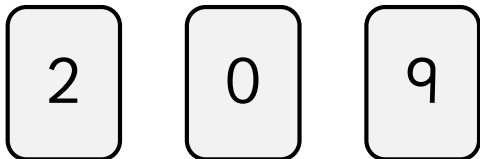
The greatest number is _____.

The smallest number is _____.

_____ is greater than _____.

_____ is smaller than _____.

3.




The greatest number is _____.

The smallest number is _____.

_____ is greater than _____.

_____ is smaller than _____.

4.




The greatest number is _____.

The smallest number is _____.

_____ is greater than _____.

_____ is smaller than _____.

5.



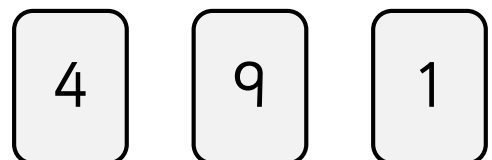
The greatest number is _____.

The smallest number is _____.

_____ is greater than _____.

_____ is smaller than _____.

6.



The greatest number is _____.

The smallest number is _____.

_____ is greater than _____.

_____ is smaller than _____.

Order numbers



Complete the sentences.

1.

5

7

3

_____ is greater than _____.

_____ is smaller than _____.

_____ > _____ > _____

_____ < _____ < _____

2.

8

1

4

_____ is greater than _____.

_____ is smaller than _____.

_____ > _____ > _____

_____ < _____ < _____

3.

2

0

9

_____ is greater than _____.

_____ is smaller than _____.

_____ > _____ > _____

_____ < _____ < _____

4.

7

6

3

_____ is greater than _____.

_____ is smaller than _____.

_____ > _____ > _____

_____ < _____ < _____

5.

3

8

5

_____ is greater than _____.

_____ is smaller than _____.

_____ > _____ > _____

_____ < _____ < _____

6.

4

9

1

_____ is greater than _____.

_____ is smaller than _____.

_____ > _____ > _____

_____ < _____ < _____

Answers

To avoid wasting paper & ink,
please do not print this page.



Order numbers



Complete the sentences.


1.



The greatest number is 7.

The smallest number is 3.

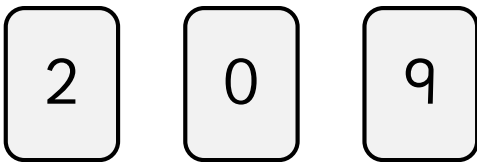
2.



The greatest number is 8.

The smallest number is 1.


3.



The greatest number is 9.

The smallest number is 0.


4.



The greatest number is 7.

The smallest number is 3.

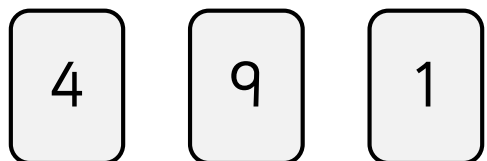
5.



The greatest number is 8.

The smallest number is 3.

6.



The greatest number is 9.

The smallest number is 1.

Order numbers



Complete the sentences. *Any suitable comparison sentences.*

1.




The greatest number is 7.

The smallest number is 3.

_____ is greater than _____.

_____ is smaller than _____.

2.



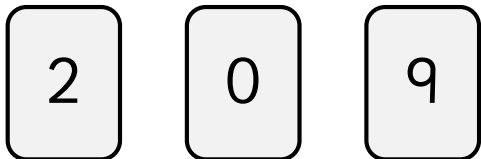
The greatest number is 8.

The smallest number is 1.

_____ is greater than _____.

_____ is smaller than _____.

3.




The greatest number is 9.

The smallest number is 0.

_____ is greater than _____.

_____ is smaller than _____.

4.




The greatest number is 7.

The smallest number is 3.

_____ is greater than _____.

_____ is smaller than _____.

5.



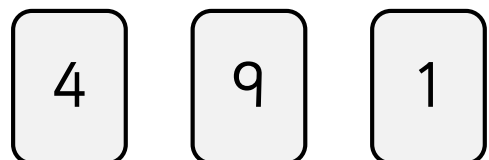
The greatest number is 8.

The smallest number is 3.

_____ is greater than _____.

_____ is smaller than _____.

6.



The greatest number is 9.

The smallest number is 1.

_____ is greater than _____.

_____ is smaller than _____.

Order numbers



Complete the sentences. *Any suitable comparison sentences.*

1.




_____ is greater than _____.

_____ is smaller than _____.

$$\underline{7} > \underline{5} > \underline{3}$$

$$\underline{3} < \underline{5} < \underline{7}$$

2.



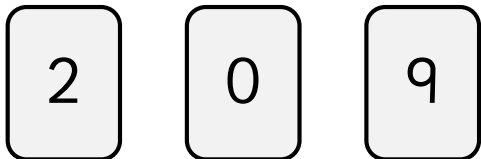
_____ is greater than _____.

_____ is smaller than _____.

$$\underline{8} > \underline{4} > \underline{1}$$

$$\underline{1} < \underline{4} < \underline{8}$$

3.




_____ is greater than _____.

_____ is smaller than _____.

$$\underline{9} > \underline{2} > \underline{0}$$

$$\underline{0} < \underline{2} < \underline{9}$$

4.




_____ is greater than _____.

_____ is smaller than _____.

$$\underline{7} > \underline{6} > \underline{3}$$

$$\underline{3} < \underline{6} < \underline{7}$$

5.



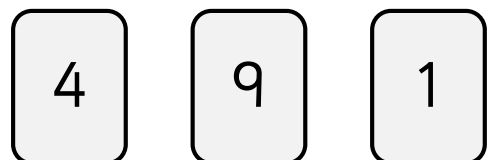
_____ is greater than _____.

_____ is smaller than _____.

$$\underline{8} > \underline{5} > \underline{3}$$

$$\underline{3} < \underline{5} < \underline{8}$$

6.



_____ is greater than _____.

_____ is smaller than _____.

$$\underline{9} > \underline{4} > \underline{1}$$

$$\underline{1} < \underline{4} < \underline{9}$$