

Litres and millilitres

Write each measurement in millilitres.

1 4l

3 0.2l

5 0.25l

2 0.5l

4 1.4l

6 1.75l

Write each measurement in litres.

7 3000 ml

9 1500 ml

11 2800 ml

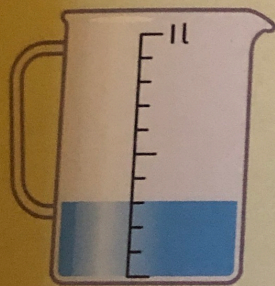
8 400 ml

10 750 ml


12 3250 ml

Read each scale. How much is in each jug?

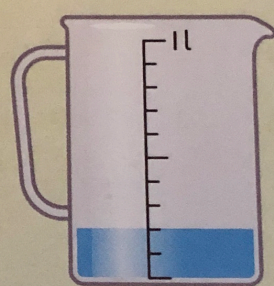
13



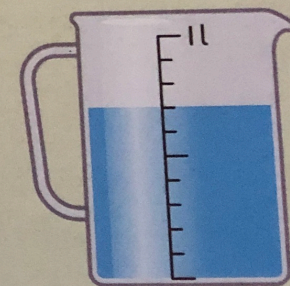
15



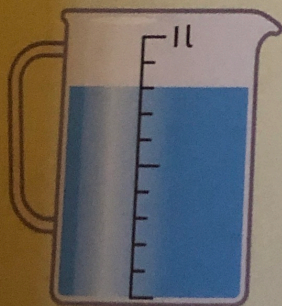
17



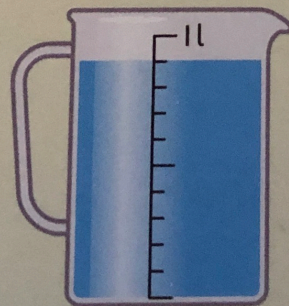
19



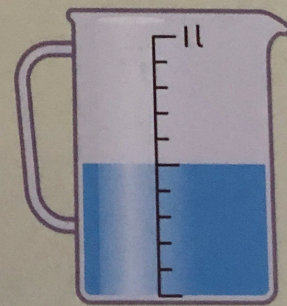
14



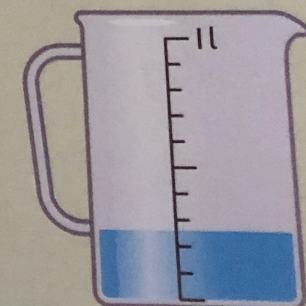
16



18



20



THINK

Write these measurements in order, from the least to the greatest:

500 ml 0.75 litres 0.2 litres 350 ml 1200 ml 1.4 litres