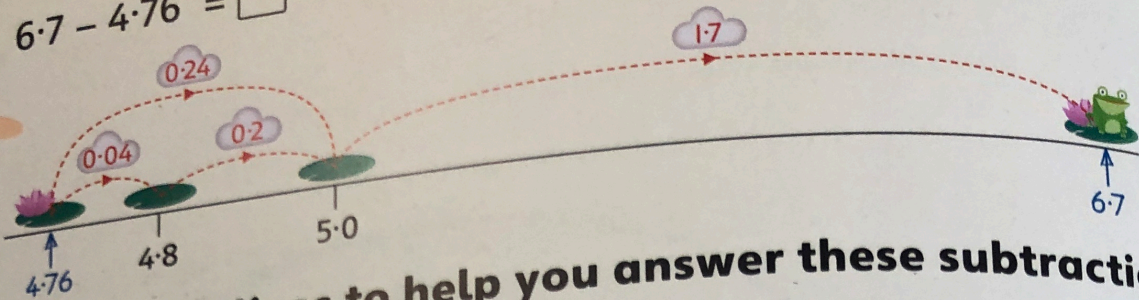



$6.7 - 4.76 = \square$



Draw number lines to help you answer these subtractions.

1 $13.2 - 10.54 = \square$



2 $9.2 - 7.39 = \square$

3 $13.4 - 10.76 = \square$

4 $6.1 - 4.18 = \square$

5 $11.5 - 9.66 = \square$

6 $10.21 - 8.63 = \square$


7 $15.18 - 10.59 = \square$

8 $13.61 - 11.93 = \square$

9 $18.72 - 12.85 = \square$

Solve these problems.

- 10 A length of wood is 3.63 m. Bob cuts 1.78 m off it. How long is the length now?
- 11 How much heavier is 14.2 kg than 11.87 kg?
- 12 From Topton to Bury it is 13.32 km. Sanjar drives 7.64 km from Topton towards Bury. How far has he still to go?
- 13 Jo had £24.30. She spent £21.79. How much has she now?



Write your own decimal subtraction and draw a number line to answer it.