

Addition round

There's a clue in the title on this sheet!



Choose two numbers with a total between 30 and 40.
 Choose two numbers with a total between 40 and 50.
 Choose two numbers with a total between 50 and 60.
 Work out the exact answer each time.

23.46

29.15

32.76

22.87

16.37

17.28

- 1** Between 30 and 40 **2** 40 and 50 **3** 50 and 60

+ _____

+ _____

+ _____

Answers will vary depending on numbers chosen – check the method.

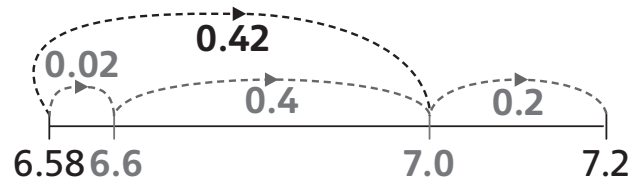
Subtraction workout

Check the method used.
 Here are some examples:

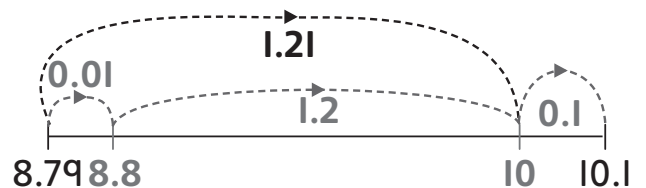
Remember me?



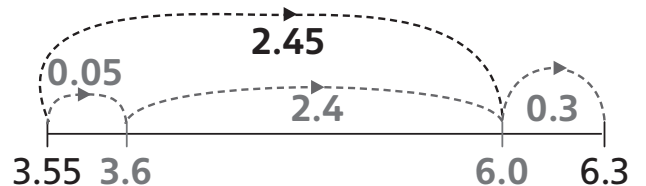
4 $7.2 - 6.58 =$



5 $10.1 - 8.79 =$



6 $6.3\text{m} - 3.55\text{m} =$




7 $£25.35 - £18.67 =$



8 $14.26\text{kg} - 13.78\text{kg} =$



9 $72.46 - 56.59 =$



Consecutive digits challenge!

- 10** Work out $43.21 - 12.34$ and record your answer.

30.87

Now choose a new number with consecutive digits and two decimal places. Reverse the digits. Subtract the smaller number from the larger number. What happens?

Try some other numbers with consecutive digits.



The answer is always 30.87.

I found this:

