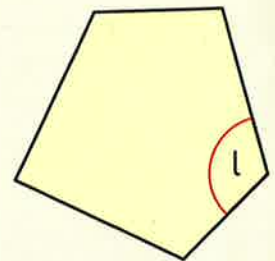
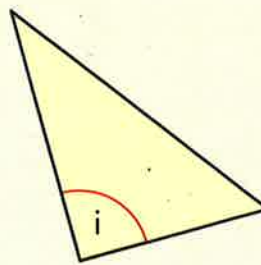
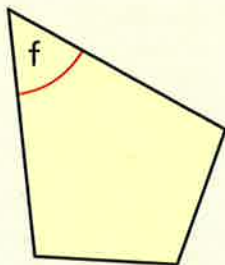
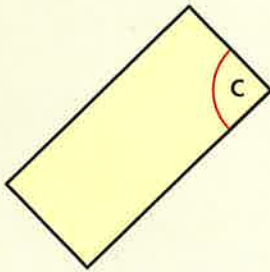
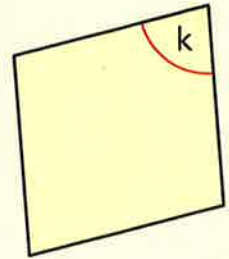
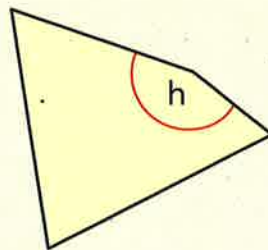
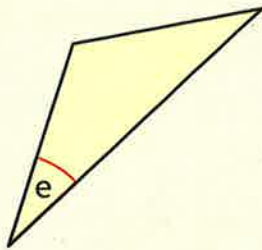
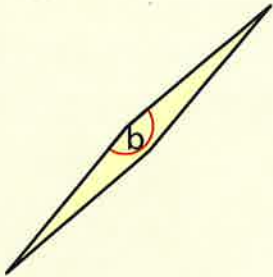
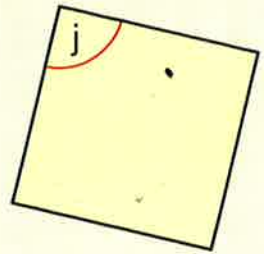
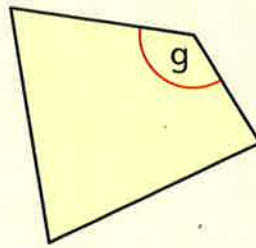
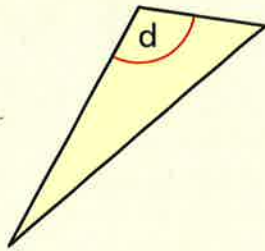
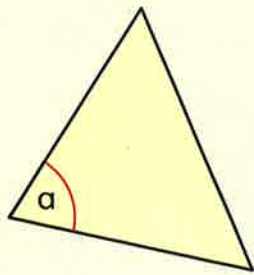


1 Write whether each angle is acute, right or obtuse.



Write whether each angle given below is acute, right or obtuse.

2 45°

5 110°

8 90°

11 164°

3 30°

6 175°

9 15°

12 33°

4 95°

7 11°

10 125°

13 91°



Can you think of any capital letters that have two or more acute angles? If so write them down.



I am confident with identifying acute, right and obtuse angles.