




Write the letters of the sides that are:



- 1 parallel to b
- 2 perpendicular to m
- 3 parallel to r
- 4 perpendicular to a
- 5 parallel to f
- 6 parallel to c
- 7 perpendicular to k
- 8 parallel to h
- 9 parallel to o
- 10 parallel to j
- 11 parallel to d
- 12 parallel to q

True or false? Discuss with a partner.

- 13 All rectangles have two pairs of parallel sides.
- 14 If a square has horizontal sides then it also has vertical sides.
- 15 A regular hexagon has three pairs of parallel sides.
- 16 The angle between a horizontal line and a vertical line is a right angle.
- 17 A regular pentagon has perpendicular sides.
- 18 An equilateral triangle has perpendicular sides.



I am confident with identifying parallel and perpendicular lines.