


Write how much is in each container using the unit shown on it.

1



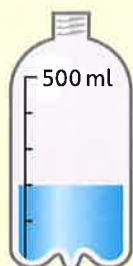
6



11




2



7



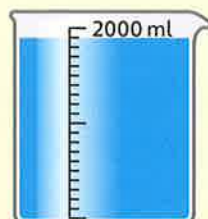
12



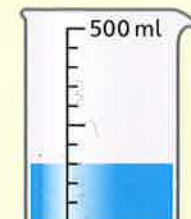
3



8



13



4



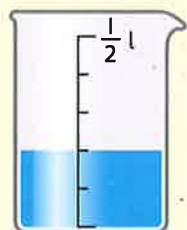
9




14



5



10



15



I am confident with reading and recording litre and millilitre capacities.